

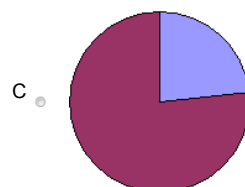
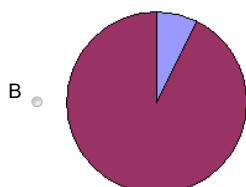
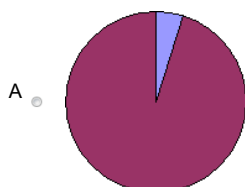
Occhio al grafico!
Geografia

Rossana Cannavacciuolo
2012

Quale grafico rappresenta l'esatta percentuale di abitanti che vive nella capitale?

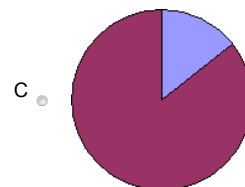
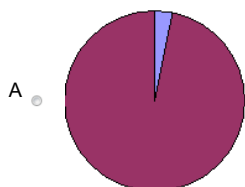
1

Sudafrica: 46.186.365 ab.
Città del Capo : 3.497.097 ab.



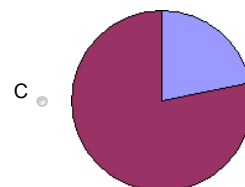
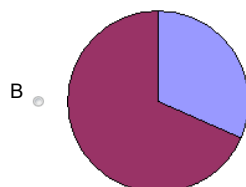
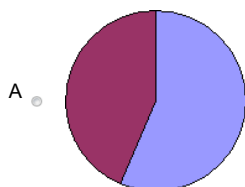
2

Francia: 65.447.374 ab.
Parigi: 2.211.297 ab.



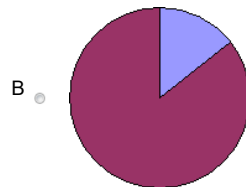
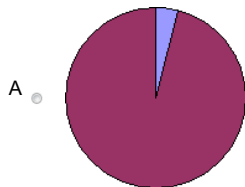
3

Lettonia: 2.267.886 ab.
Riga: 715.978 ab.



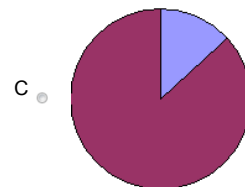
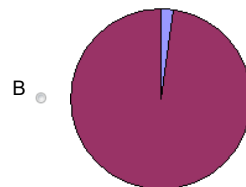
4

Russia: 143.474.000 ab.
Mosca: 11.551.930 ab.



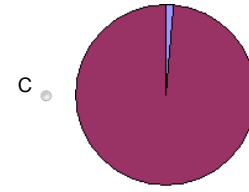
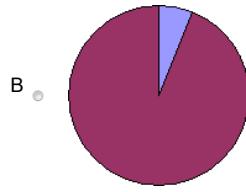
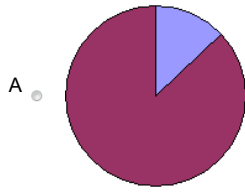
5

Italia: 60.776.531 ab.
Roma: 2.777.979 ab.



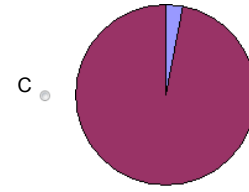
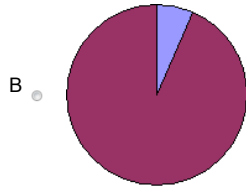
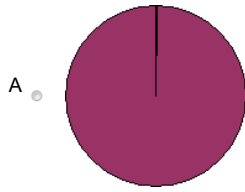
6

Australia: 22.618.521
Canberra: 340.800



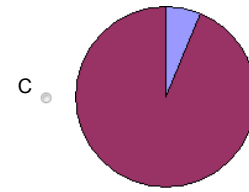
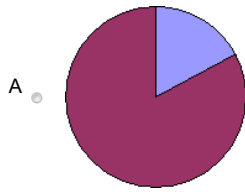
7

Stati Uniti: 308.745.538 ab.
Washington: 588.292 ab.



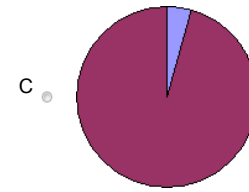
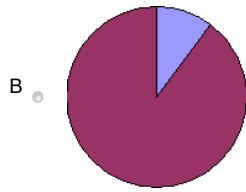
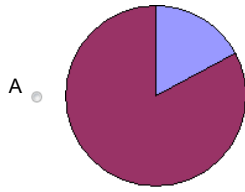
8

Cina: 1.336.718.015 ab.
Pechino: 19.959.563 ab.



9

Giappone : 126.000.000 ab.
Tokio: 13.010.287 ab.



10

Regno Unito: 65.356.600 ab.
Londra: 7.556.900 ab.

